


# Home Learning Grid - Summer Term 2 Week 7

<p><b>Reading</b> Choose a book of your choice and create a fact file about your favourite character.</p> <p><b>Don't forget to complete the activities on read theory.</b></p> <p><b>Phonics</b> We are looking at applying the 'th', and 'sh'sound. Please complete these sounds in your work pack OR work on spelling shed and purple mash.</p>	<p><b>Writing</b></p> <p><b>Write a diary about what you dream to do or go this summer full of adjectives, similes, adverbs, conjunctions and beautiful handwriting.</b></p>  <p>A colorful illustration of a beach scene. It features a sun with a face, a beach umbrella, flip-flops, sunglasses, a beach ball, a palm tree, a beach chair, a bucket, and the words 'Summer TIME' written in a playful font.</p>	<p><b>It's all about money in Maths</b> set online OR on the worksheets set below.</p> <p>Remember to use your column method or mental methods.</p> <p>As a treat for being so amazing in my class I am giving you £1,000 to spend. What would you buy with this money?</p>
<p><b>Get Creative</b></p> <p><b>Construct your own mini beach in a tray with palm trees and more.</b></p> <p><b>Design your own summer collage of all the things you wish to do in the sun and all the things you have done in the past summer holidays.</b></p>	<p><b>PSHE &amp; Life Skills</b></p> <p>Write a list of 5 things you were proud of achieving in Jupiter Class this year that you wish to take with you in your next year at Fishwick Primary School.</p>	<p><b>Get Active</b></p> <p>Miss Kealey managed to complete some tasks using a ball in 30 seconds. Think you can beat her?</p> <ul style="list-style-type: none"> <li>Kicking a ball against a wall - 15</li> <li>Throwing and catching a ball – 10</li> <li>Throwing a ball and clapping – 4</li> <li>Throwing a ball into a bin – 2</li> <li>Kicking a ball into a bin – 0</li> <li>Rolling a ball into a gap - 6</li> </ul> <p><b>Science</b></p> <p>Build a paper boat to float on water. Using a straw blow the boat to move. You can make more boats and have a race or even time yourself.</p>

		Why does it float? What makes it move? How can you make it go quicker?	
--	--	--	--

**Don't forget daily;**

Purple Mash MTC and and Times Tables Rockstars OR times tables practice.

20 minutes of free reading anything of your choice then use your bookmarks for questioning what you have read OR Complete 20 minutes of Read Theory

Complete spellings on spelling shed OR the list in your packs.

Handwriting

GPS; Use conjunctions because, until, so, but, although and even though in silly sentences.

Don't forget to email me pictures of your activities if you can to [Nicola.pilkington@fishwick.lancs.sch.uk](mailto:Nicola.pilkington@fishwick.lancs.sch.uk) and [rebecca.kealey@fishwick.lancs.sch.uk](mailto:rebecca.kealey@fishwick.lancs.sch.uk)

# How much money is in my jar?



**Grocery Store Price List:**

apple 50p

banana 40p

carrot 50p

pineapple £1.50

pack of strawberries 80p

box of peaches £2

pack of tomatoes 90p

milk £2.80

cheese £2.90

chocolate £3.10

eggs £2.50

spaghetti £2.30

pepper 60p

rice £3.60

1.



Total price = \_\_\_\_\_

2.



Total price = \_\_\_\_\_

3.



Total price = \_\_\_\_\_

4.




Total price = \_\_\_\_\_

5.



Total price = \_\_\_\_\_









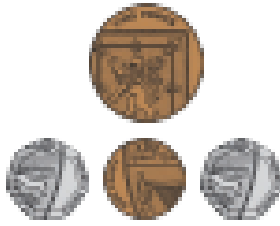






6.



Total price = \_\_\_\_\_

# Check Your Change

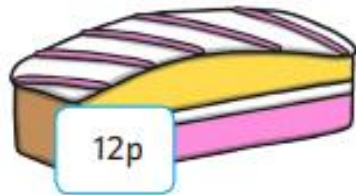
Check the change the shopkeeper has given you. Is it the correct amount or have they made a mistake?

You buy	You pay	Your change	Correct or Incorrect (✓/x)	Correct amount required
				
				
				
				
				

Addition and Subtraction with Change



4. Annie has 20p. She gives her brother 12p to buy a cake at the school fair. How much money will she have left?



Addition and Subtraction with Change



1. Annie buys a packet of crisps and a drink. How much do they cost altogether?



Addition and Subtraction with Change



2. Poppy has 87p in her purse. She puts 50p in the collection for Children in Need. How much does she have left?



Addition and Subtraction with Change



3. Halim's mother gives him £1 to buy his sister a birthday present. He buys a pencil for 46p. How much change will he receive?



## Maths Mastery - Money

1. How many different ways can you make the total of £2.95?

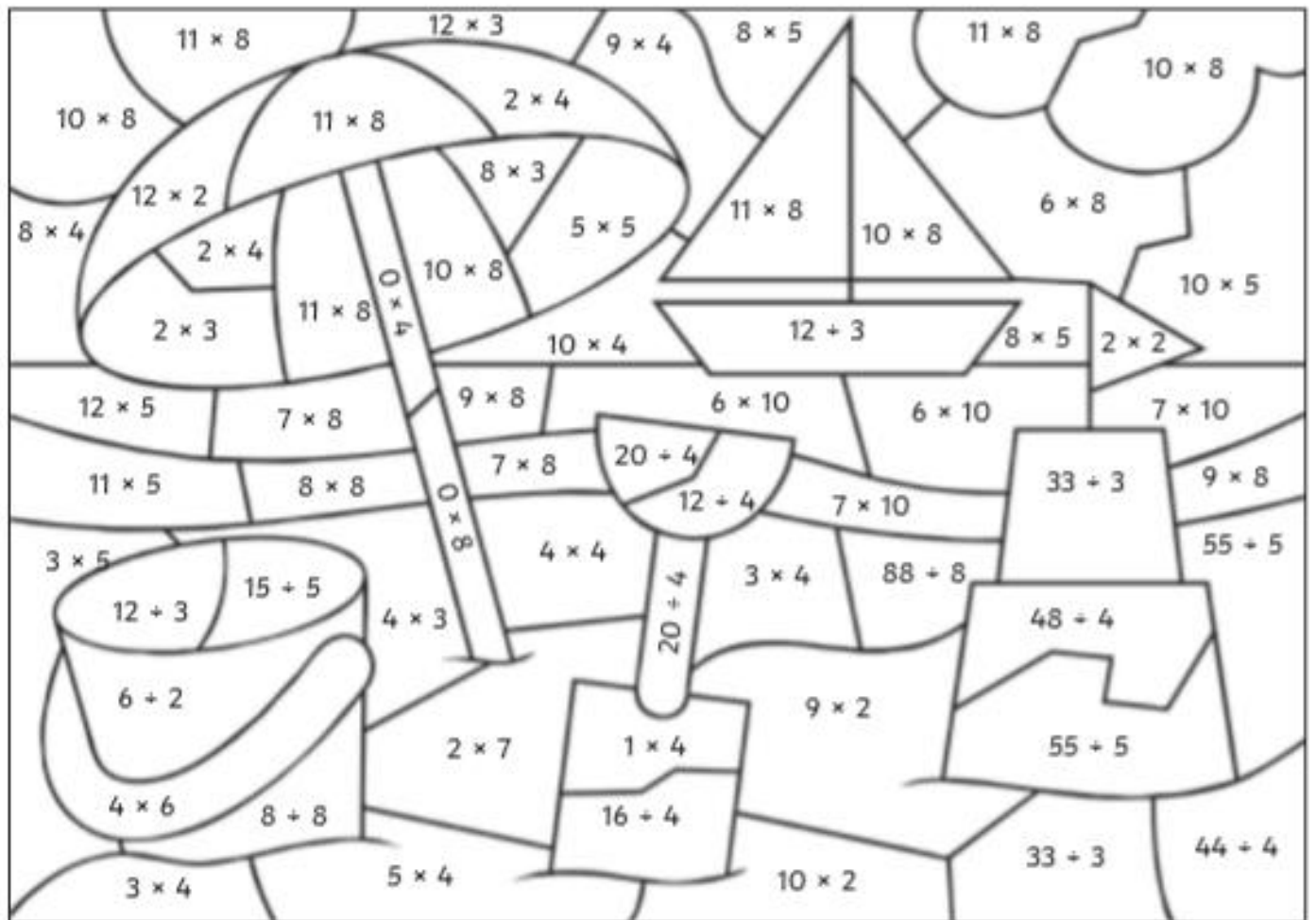
You can use the same value coin more than once.

What is the least amount of coins you could use?



# Summertime Colour by Calculations

Use the key to colour the summer-themed picture.



Grey:	Red:	Orange:	Yellow:	Green:	Light Blue:	Dark Blue:	White:
0	1 - 5	6 - 10	11 - 20	21 - 30	31 - 50	51 - 79	80 - 100